



INTERNATIONAL PUBLIC SCHOOL

HOSHANGABAD ROAD, MISROD, BHOPAL

Class III

Name : _____

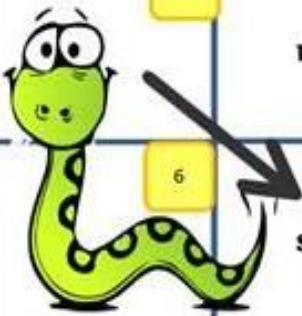
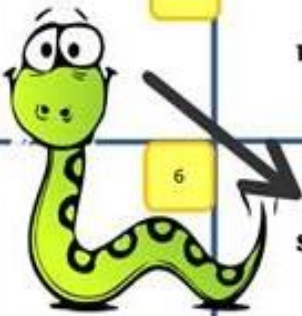

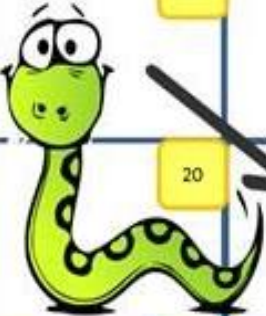


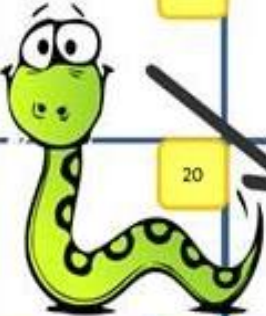



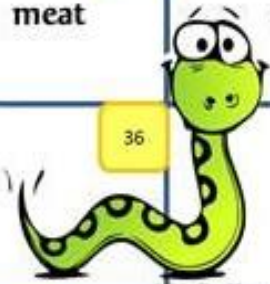

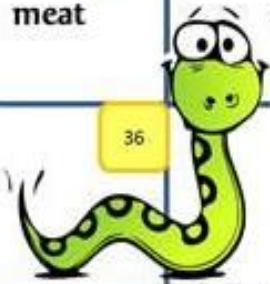
Section : _____

Roll No. : _____



I. Countable or Uncountable?

Countable nouns are the nouns which can be counted whereas uncountable nouns are the nouns which cannot be counted. Enjoy the board game by colouring the **countable nouns** with pink colour and **uncountable nouns** with blue colour.

START	1	2	3	4
	sugar	rice		news
9	8	7	6	5
banana	water	tea		salad
10	11	12	13	14
cheese	soup		sandwich	money
19	18	17	16	15
	hand		honey	
20	21	22	23	24
	chair	love	lemon	
29	28	27	26	25
animal	hair	gold	butter	
30	31	32	33	34
book	music		meat	
FINISH	38	37	36	35
	egg			car

II. Paste and label any four items of countable and uncountable nouns each in the given space. (You can use zip locks to paste uncountable nouns)

Countable Nouns

<hr/>	<hr/>
<hr/>	<hr/>

Uncountable Nouns

<hr/>	<hr/>
<hr/>	<hr/>

Common nouns are the names given in general to persons, places, animals or things which are of same kind.

Proper nouns are the names of specific people, places, things, or ideas.

III. Underline common nouns and circle the proper nouns in the story given below (eight each). Write the proper nouns correctly, with the first letter of each word capitalized in the given blanks.

One morning sameer woke up late and he had to hurry to get ready for school. His school, westside public school, was about ten minutes away from his house. He picked up his library book, the ant and the grasshopper, and tucked it into his backpack with his homework. He almost forgot his football uniform. He had to practice with the red tigers, his football team, after school. In the bathroom, he ran a comb through his hair and brushed his teeth with colgate toothpaste. There was only time for a few bites of his favourite chocolate, dairy milk. He ran to the car with his mom, and they drove to school. His best friend, sanya was waiting for him outside the school. They both hurried to mrs. Kapoor's classroom, and sat down in their seats before the bell rang.

Capitalize proper nouns. Write them here:

1. _____

5. _____

2. _____

6. _____

3. _____

7. _____

4. _____

8. _____

Mention common nouns.

1. _____

5. _____

2. _____

6. _____

3. _____

7. _____

4. _____

8. _____

III. Fill in the puzzle grid with the name of each activity you would like to do in your free time. Use the word bank, if required. Write numbers (1-12) in the circles given according to your priority.

- | | | |
|---------------------|-----------------|--------------------|
| 1. Watch TV | 2. Paint | 3. Go shopping |
| 4. Go Fishing | 5. Take photos | 6. Ride a horse |
| 7. Read | 8. Go cycling | 9. Play Video game |
| 10. Listen to music | 11. Go swimming | 12. Do homework |



S	R	E	A	D	G	I	L	V	P	A	L	P	I
T	A	K	E	P	H	O	T	O	S	I	I	L	G
D	N	O	G	A	C	H	P	O	I	G	S	A	O
D	R	I	T	I	C	A	P	D	G	G	T	Y	H
G	I	T	H	T	S	G	G	O	O	I	E	V	O
O	D	D	A	W	G	O	O	H	S	W	N	I	P
C	E	W	N	G	S	S	F	O	H	I	T	D	O
Y	A	G	A	P	G	W	I	M	O	G	O	E	P
C	H	R	O	C	T	I	S	E	P	O	M	O	G
L	O	R	D	G	K	M	H	W	P	S	U	G	P
I	R	M	S	I	A	M	I	O	I	O	S	A	V
N	S	O	O	E	P	I	N	R	N	M	I	M	A
G	E	I	C	C	V	N	G	K	G	N	C	E	S
D	H	C	M	O	T	G	O	G	T	A	W	S	E



IV. Write five lines on your favourite free time activity.


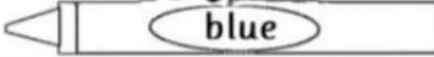
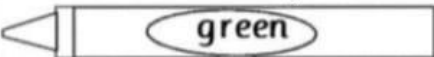





MATHEMATICS






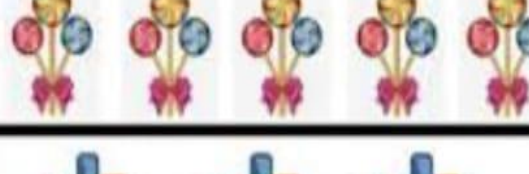



PLACE VALUE

Colour the ice-creams according to the colour code.

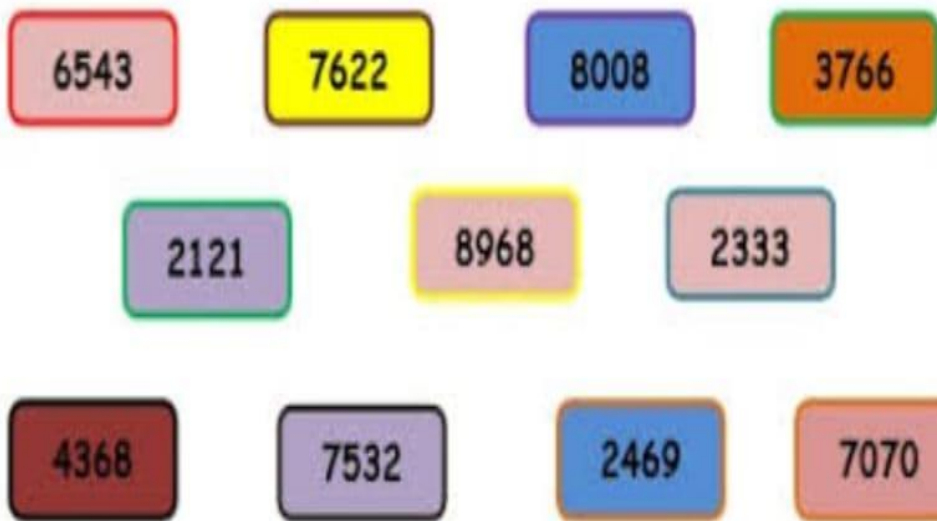
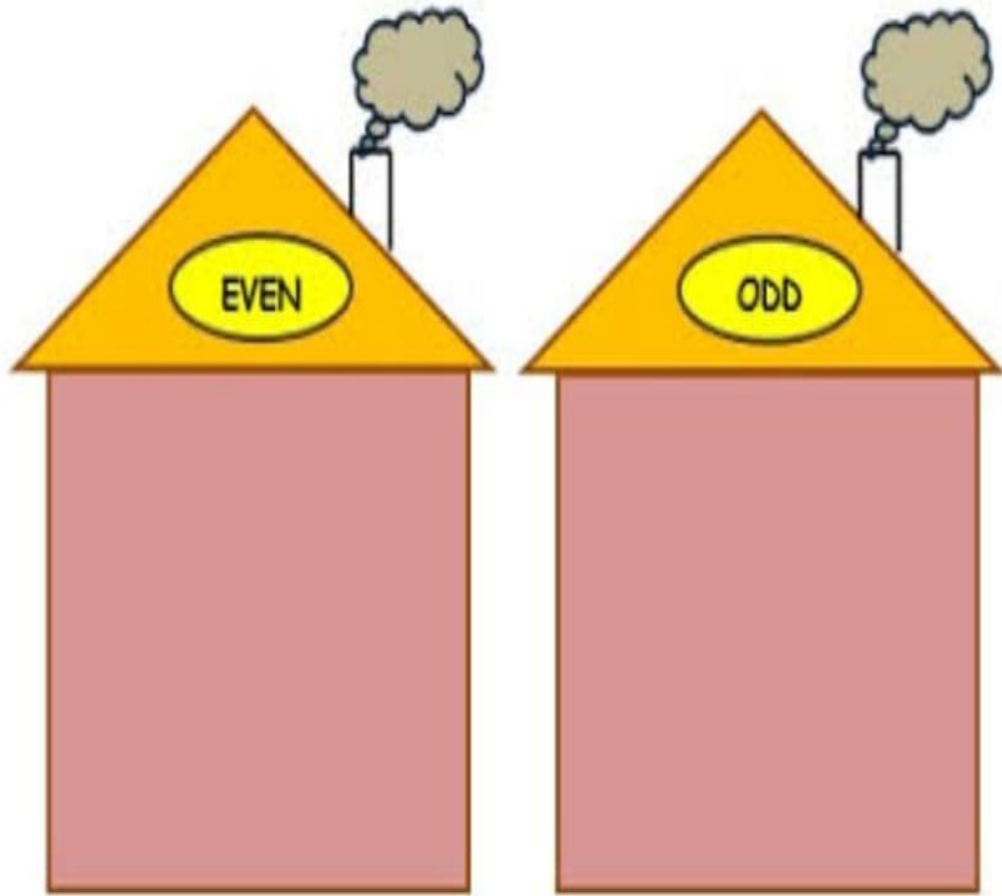
5 in 100's place 	3 in 10's place 
0 in one's place 	8 in 1000's place 




II. Write the repeated addition and multiplication sentences that illustrates each picture. The first one is done for you.

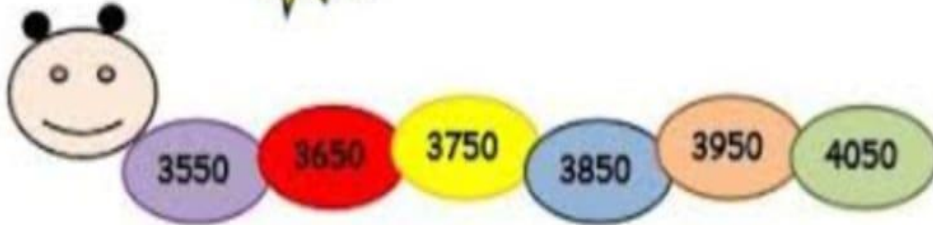
1.		$3 + 3 + 3 = 9$ $3 \times 3 = 9$
2.		
3.		
4.		
5.		
6.		
7.		
8.		
9.		

III. Sort the following numbers as even or odd and write it in the respective houses.

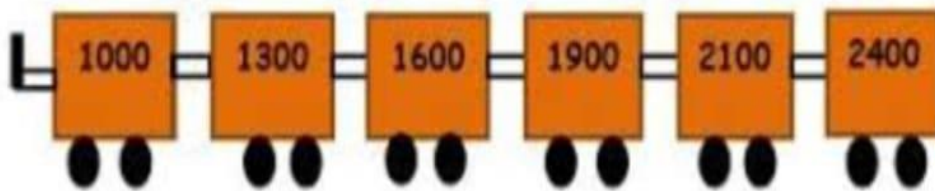


IV. Identify the skip count pattern of the following number lines.

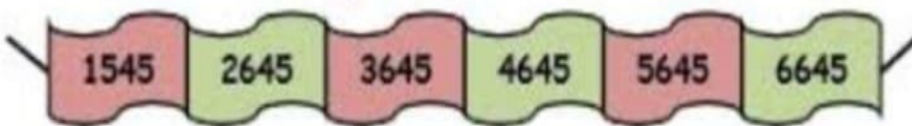
a) Skip count by 



b) Skip count by 



c) Skip count by 



d) Skip count by 

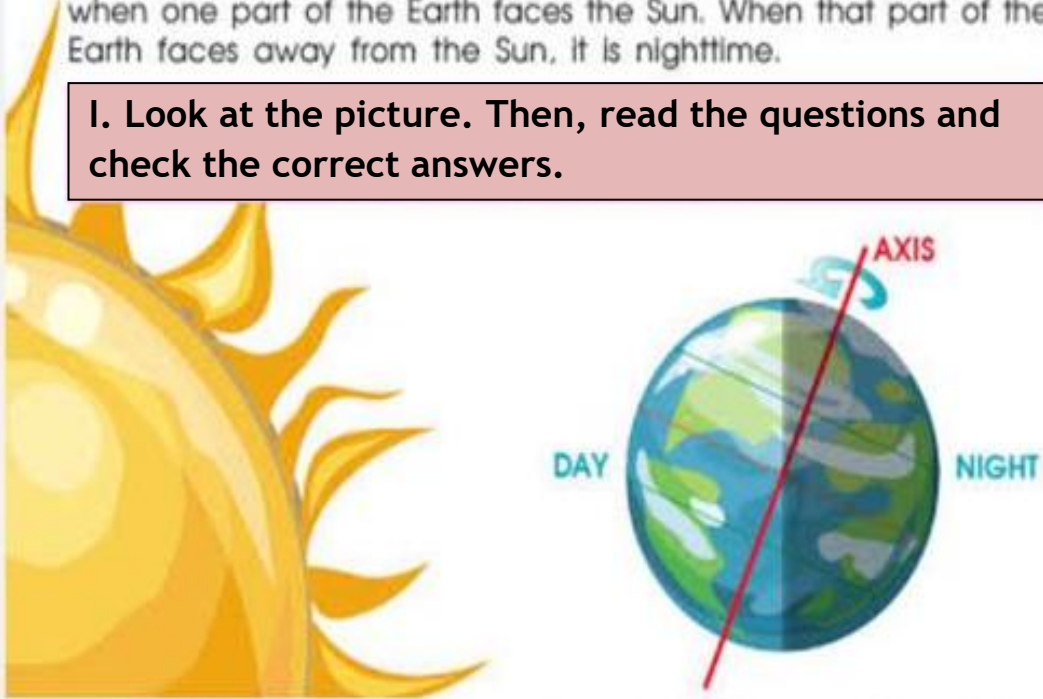


ENVIRONMENTAL SCIENCE

Our Solar System: Earth's Rotation

The Earth spins around on its axis once every day. Daytime is when one part of the Earth faces the Sun. When that part of the Earth faces away from the Sun, it is nighttime.

I. Look at the picture. Then, read the questions and check the correct answers.



What do we call the movement of Earth on its axis?

Rotation

Revolution

What happens when the Earth rotates on its axis?

Day and night

Winter, spring,
summer and fall

How long does one rotation on Earth's axis take?

24 hours, or 1 day

12 months

Parts of a plant

II. Write in the name of each part of the plant.

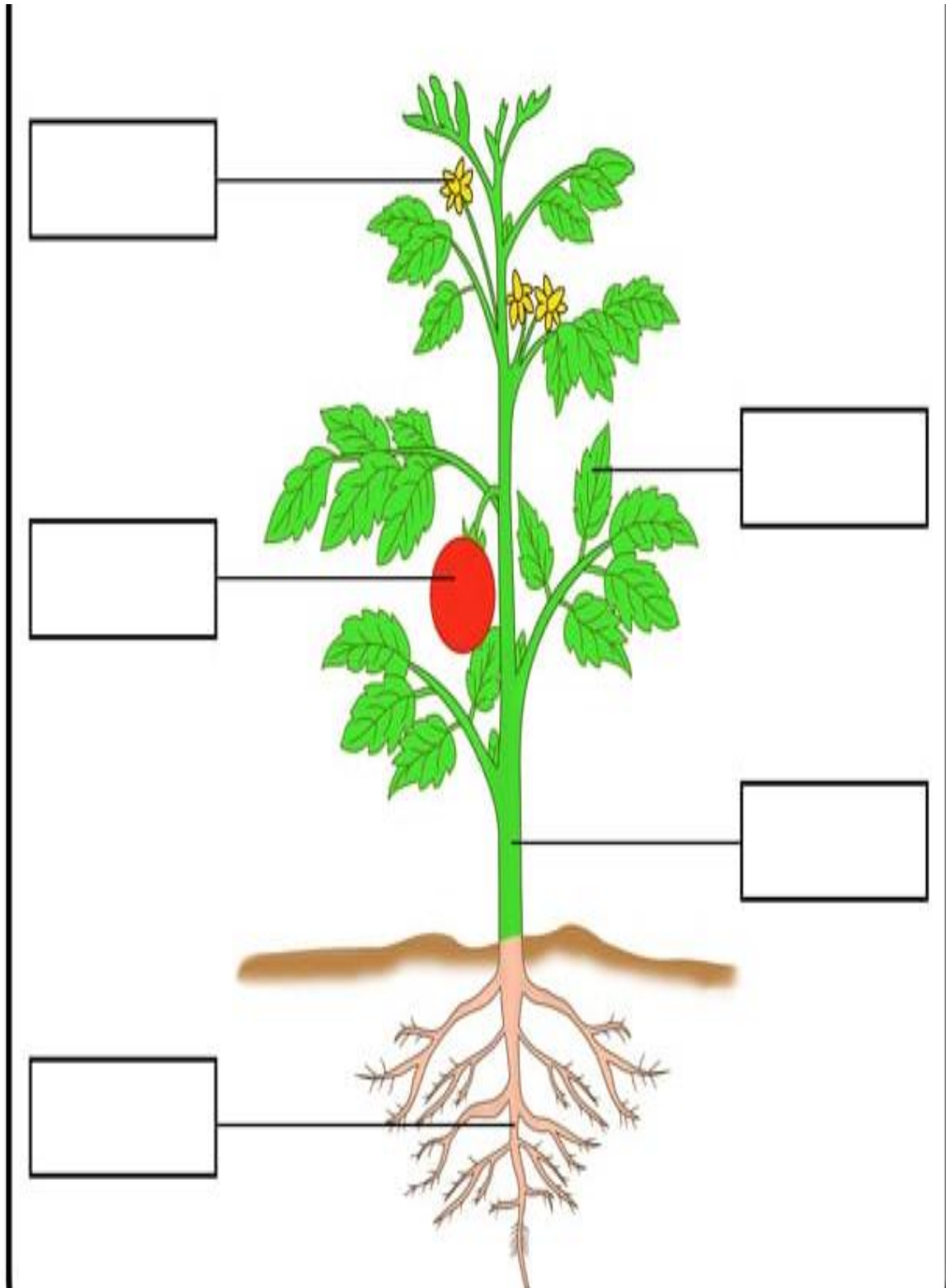
flower

fruit

leaf

stem

root





LIVING & NON LIVING THINGS

Living things breathe, move, eat, grow and feel. They give birth to their young ones.

	Rock	baby
Horse		
Television		car
Boat	fish	tree

III. A dinosaur has eaten all the living things. Write their names in the stomach of the dinosaur.

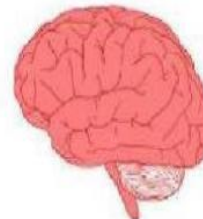
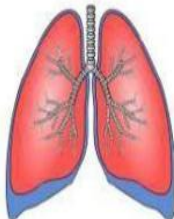
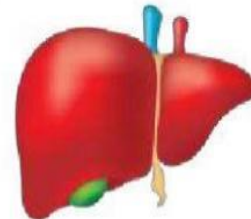



THE HUMAN BODY

IV. Fill in the blanks with the suitable answer.

stomach brain kidneys skin heart liver lungs

- a) Your _____ does all your **thinking** and tells the other part of your body **what to do**.
- b) Your _____ **pumps blood** around your body.
- c) Your _____ **bring air** in and out of your body.
- d) Your _____ **digests** your food breaking it down.
- e) Your _____ **cleans** your blood.
- f) Your _____ **filter** the blood.
- g) Your _____ **holds** everything together in a protective waterproof layer.




HINDI

प्रश्न -1 चित्र में दिए गए बीच वाले फूल में से सही वर्ण चुनकर अन्य फूलों के रिक्त स्थान में भरिए।

रोचक अभ्यास

देखो बच्चो, कैटरपिलर ने कितने सारे फूल इकट्ठे किए हैं और हर फूल में आधे अक्षर वाले शब्द लिखे हैं। लेकिन उसका पहला अक्षर हमें लिखना है। तो आओ, फटाफट बीच वाले फूल में से सही अक्षर पहचानकर आधे अक्षर वाले शब्दों को पूरा करें।



प्रश्न -2 संज्ञा शब्दों को चुनकर सही स्थान पर लिखिए।

संज्ञा अभ्यास

बोर्ड में से शब्द चुनकर, सही शीर्षक के सामने लिखें—



शहर _____

महीना _____

सब्जी _____

दिन के नाम _____


प्रश्न -3 गर्मी में खाये जाने फलो के नाम लिखे एवं उनकी तस्वीर लगायें ।

.....

.....

.....

.....



प्रश्न -4 चित्र वर्णन कीजिए।



.....

.....

.....

.....

.....

.....

.....

.....

**SUBJECT
INTEGRATION**

I. Paste your picture with a vehicle your parent's drive.

Enhance your vocabulary

I. Mention any eight parts of your vehicle.



1. _____

5. _____

2. _____

6. _____

3. _____

7. _____

4. _____

8. _____

KL 55 M 333

Do some Math

KL 55 M 333

ii. Collect vehicle numbers of any 5 vehicles in your locality.

a. Write the numbers in words.

1. _____

2. _____

3. _____

4. _____

5. _____

Let's think

III. Write four ways to control pollution.



1. _____

2. _____

3. _____

4. _____

Follow the rules



IV. यातायात के कोई तीन नियम लिखिए जब आप किसी कार में यात्रा कर रहे हों।

.....

.....

.....

.....

.....

COMPUTER

Write action of the shortcut keys given below. Use the help box, if needed.

<u>S.NO.</u>	<u>SHORTCUT KEYS</u>	<u>ACTION</u>
1	CTRL+ A	
2	CTRL+ B	
3	CTRL+ C	
4	CTRL+ E	
5	CTRL+ F	
6	CTRL+ G	
7	CTRL+ H	
8	CTRL+ I	
9	CTRL+ J	
10	CTRL+ K	
11	CTRL+ N	
12	CTRL+ O	
13	CTRL+ P	
14	CTRL+ S	
15	CTRL+ U	
16	CTRL+ V	
17	CTRL+ W	
18	CTRL+ X	
19	CTRL+ Y	
20	CTRL+ Z	

HELP BOX :

ITALIC	NEW	UNDO	HYPERLINK	CUT
UNDERLINE	REDO	SAVE	PASTE	PRINT
COPY	SELECT ALL	OPEN	FIND	GOTO
REPLACE	BOLD	JUSTIFY	CLOSE	CENTER

Art and Craft

Watermelon Painting- Follow the steps as shown in given picture and colour it by using coloured craft papers and for colouring earbuds.

